




ANCIENT CHINA: Map

Name: _____ Class: _____ Date: _____

Use the following maps to help you label the following on your map:

-  *History Alive* pgs. 198, 202, 238, 263, 428
-  *Rand McNally Classroom Atlas* pg. 93
-  *A Message of Ancient Days* pg. 263

Land:

- ☐ Gobi Desert
- ☐ Himalayas Mountains
- ☐ Mount Everest
- ☐ North China Plain
- ☐ Plateau of Tibet
- ☐ Sichuan Basin (Szechwan Basin)
- ☐ Taklimakan Desert
- ☐ Tian Mountains
- ☐ Turfan Depression
- ☐ Yunnan Plateau

Water:

- ☐ East China Sea
- ☐ Mekong River (draw it in yourself)
- ☐ South China Sea
- ☐ Yangtze River / Chiang Jiang (both)
- ☐ Yellow River / Huang He (write both)
- ☐ Yellow Sea











Cities:

- ☐ Xi'an (Xianyang)

Historical Sites:

- ☐ Great Wall (draw it in yourself)

LEGEND: shade each a different color

	Mountains		Peak
	Desert		River
	Lowland		Basin
	Plain		Plateau
	Ocean		Other land in China

